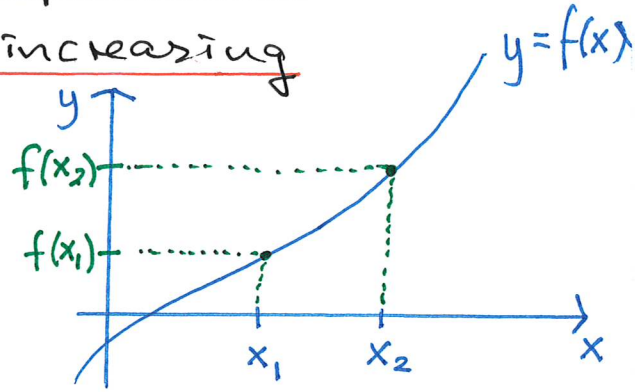


- Plan
1. Increasing and decreasing functions
 2. Circles and ellipses
 3. Polynomial functions

1. Increasing and decreasing functions

Definition A function $f(x)$ is increasing

if for all $x_1 < x_2$
one has $f(x_1) \leq f(x_2)$



Ex $f(x) = 2x + 5$ is increasing for all x .

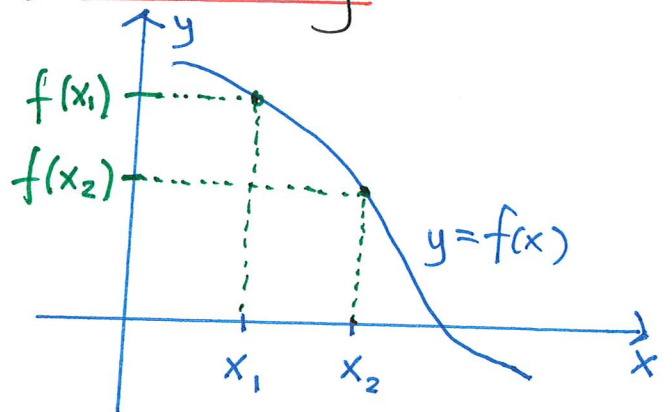
Reason: Assume $x_1 < x_2$ | $\cdot 2$
 $2x_1 < 2x_2$ | $+ 5$

$$f(x_1) = 2x_1 + 5 < 2x_2 + 5 = f(x_2)$$

so $f(x)$ is increasing (actually strictly increasing)

Definition A function $f(x)$ is decreasing

if for all $x_1 < x_2$
one has $f(x_1) \geq f(x_2)$



Problem Show that

$f(x) = -2x + 5$ is
(strictly) decreasing.

Solution Suppose $x_1 < x_2$ $\quad | \cdot (-2)$
 $-2x_1 > -2x_2$ $\quad | +5$

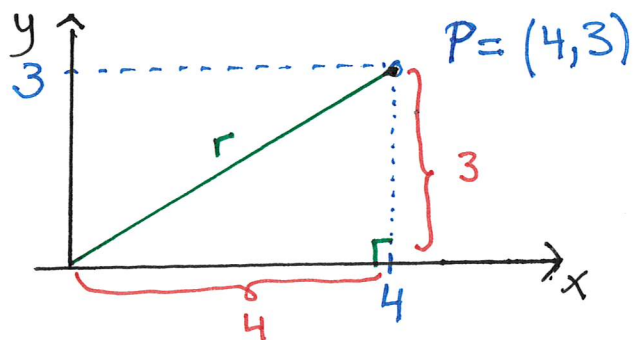
$$f(x_1) = -2x_1 + 5 > -2x_2 + 5 = f(x_2)$$

Problem We have a constant function $f(x) = 5$
 Decide whether $f(x)$ is increasing, decreasing or neither.

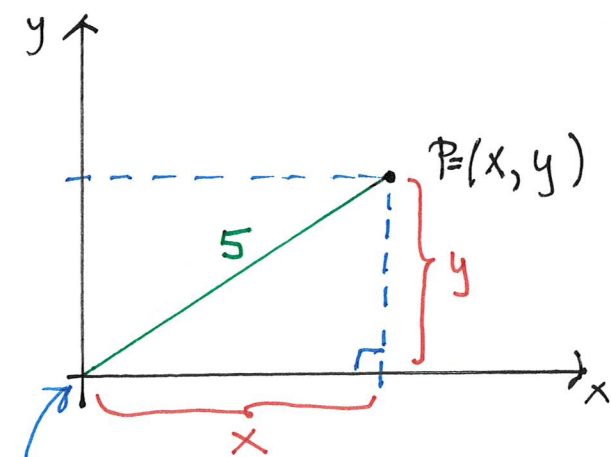
Solution

Increasing: If $x_1 < x_2$ then $f(x_1) = 5 \leq 5 = f(x_2)$
 Decreasing: If $x_1 < x_2$ then $f(x_1) = 5 \geq 5 = f(x_2)$
 - so both. But neither strictly increasing nor strictly decreasing.

2. Circles and ellipses

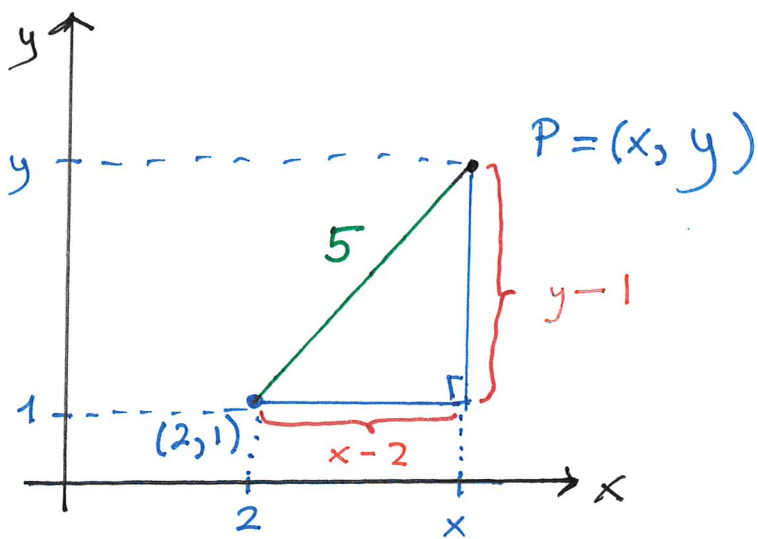


Pythagoras:
 $r^2 = 4^2 + 3^2 \quad (r \geq 0)$
 $r^2 = 16 + 9 = 25$
 $r = \sqrt{25} = 5$



Pythagoras:
 $25 = x^2 + y^2$
 - one equation
 - two unknowns
 - infinitely many solutions

origin $(0,0)$ is the centre of the circle of solutions, with radius = 5



Pythagoras:

$$5^2 = (x-2)^2 + (y-1)^2$$

$$25 = x^2 - 4x + 4 + y^2 - 2y + 1$$

that is

$$x^2 + y^2 - 4x - 2y = 20$$

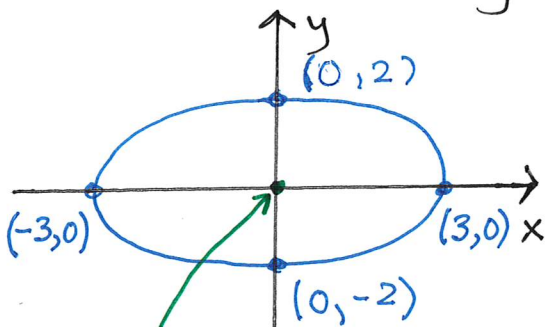
Problem Determine the radius and the centre of $x^2 + y^2 - 2x + 6y = -9$

Solution
$$\underbrace{(x-1)^2}_{x^2 - 2x + 1} + \underbrace{(y+3)^2}_{y^2 + 6y + 9} = -9 + 1 + 9 = 1$$

Centre: $(1, -3)$, radius: $\sqrt{1} = 1$

Ellipses $4x^2 + 9y^2 = 36$

x	3	-3	0	0
y	0	0	2	-2



the centre of the ellipse: $(0, 0)$

I divide each side of the equation by 36 and get

$$\frac{4}{36}x^2 + \frac{9}{36}y^2 = 1$$

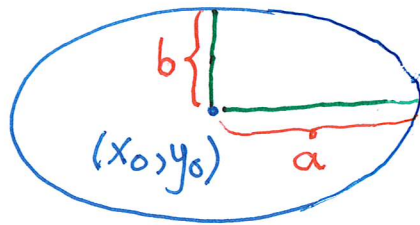
$$\left(\frac{x}{3}\right)^2 + \left(\frac{y}{2}\right)^2 = 1$$

Similar to a circle equation but the x-axis is stretched by a factor 3 and the y-axis is stretched by a factor 2.

In general, any ellipse is the set of solutions of an equation of the

form
$$\frac{(x-x_0)^2}{a^2} + \frac{(y-y_0)^2}{b^2} = 1$$

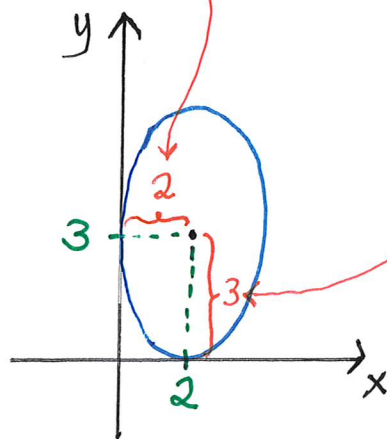
Here (x_0, y_0) is the centre and a and b are semi-axes



Ex
$$\frac{(x-2)^2}{4} + \frac{(y-3)^2}{9} = 1$$

Centre: $(2, 3)$

Semi-axes: $a = \sqrt{4} = 2$, $b = \sqrt{9} = 3$



3. Polynomial functions

$$f(x) = a_n x^n + a_{n-1} x^{n-1} + \dots + a_1 x + a_0 \quad (a_n \neq 0)$$

has degree n , write $\deg(f) = n$

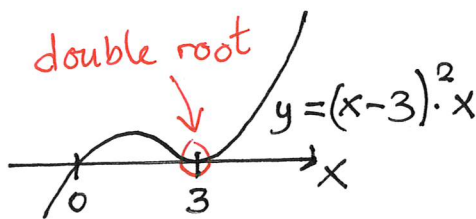
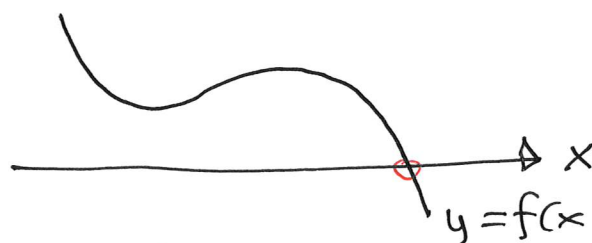
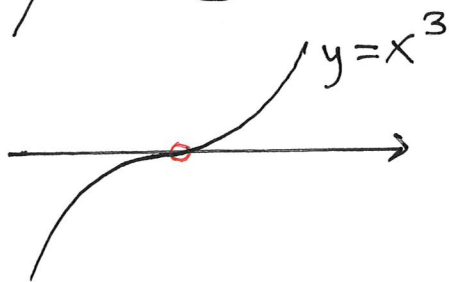
Then:

- $f(x)$ has at most n roots (zeros)

- If the degree is an odd number, then $f(x)$ has at least one zero.

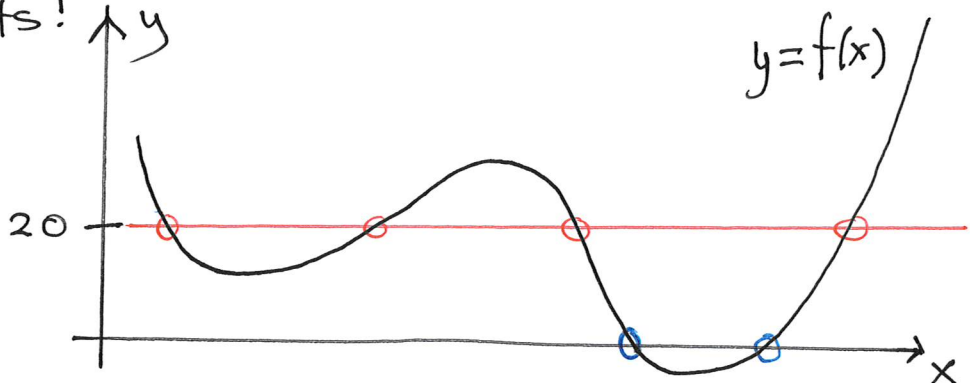
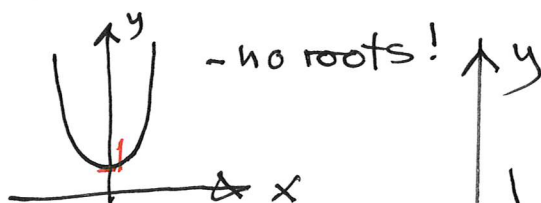
- If a polynomial $h(x)$ has m roots then $\deg(h) \geq m$

Ex $y = f(x)$ has degree 3



$y = f(x)$
 $\deg(f) = 3$

Ex $f(x) = x^4 + 1$



$f(x) = 0$ has only 2 roots, but

$f(x) = 20$ has 4 solutions

that is $f(x) - 20 = 0$ has the same 4 solutions (roots!)

- a polynomial of the same degree as $f(x)$.

So $f(x)$ has at least degree 4.