

- Plan
1. Functions and graphs
 2. Linear functions and straight lines
 3. Quadratic functions and parabolas
 4. Revenue - and cost functions

1. Functions and graphs

Empirical functions

- the temperature as a function of time
- the price of salmon
- all kinds of 'indexes'
- fertility

A function is a table of function values

x
$f(x)$

Ex $f(x)$ = average age at the birth of the first child in year x .

Domain of definition: $x \in [1961, 2022]$
 $= D_f$

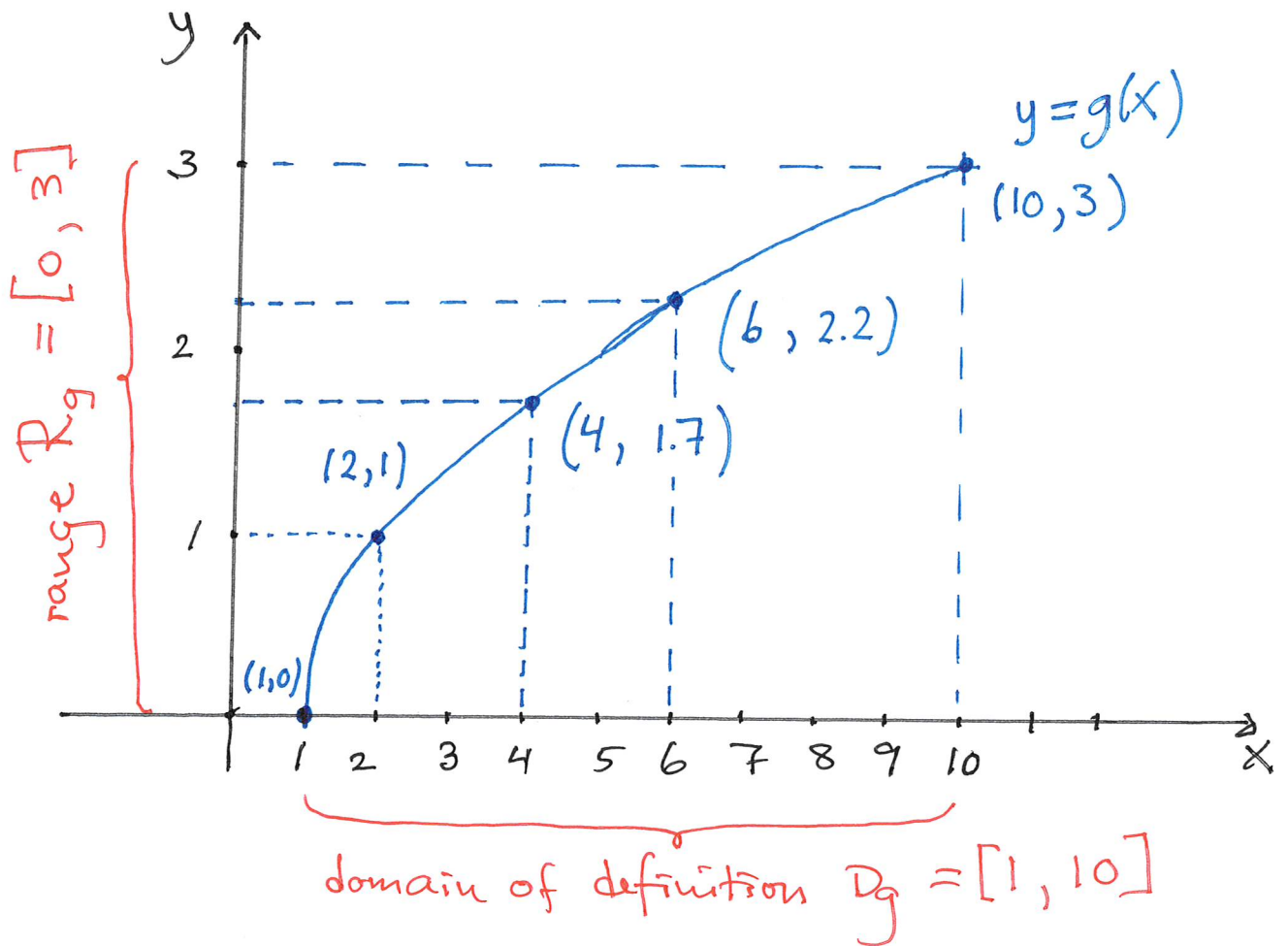
Ex $g(x) = \sqrt{x-1}$. The largest possible domain is $D_g = [1, \rightarrow)$

Want to draw the graph with

$D_g = [1, 10]$. I make a table of

function values:

x	1	2	4	6	10
$g(x)$	0	1	1.7	2.2	3



2. Linear functions $f(x) = ax + b$
 - the graph is a line

The point-slope formula :

If (x_0, y_0) is a point on the graph (a line!)
 and a is the slope, then

$$y - y_0 = a \cdot (x - x_0)$$

↑ dependent variable

↑ independent variable

start: 11.00

Ex If $(x_0, y_0) = (9, 25)$

and $(x_1, y_1) = (11, 31)$ are two points on the line, then the slope is (the relative change)

$$a = \frac{\text{change in } y\text{-value}}{\text{change in } x\text{-value}} = \frac{31 - 25}{11 - 9}$$

$$= \frac{6}{2} = 3$$

The point-slope formula gives

$$y - 25 = 3 \cdot (x - 9)$$

$$\text{so } y = 3x - 27 + 25$$

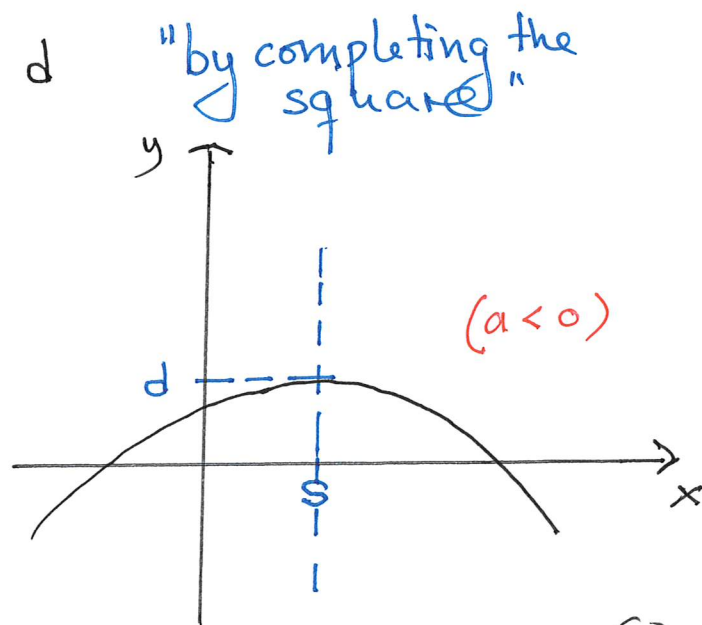
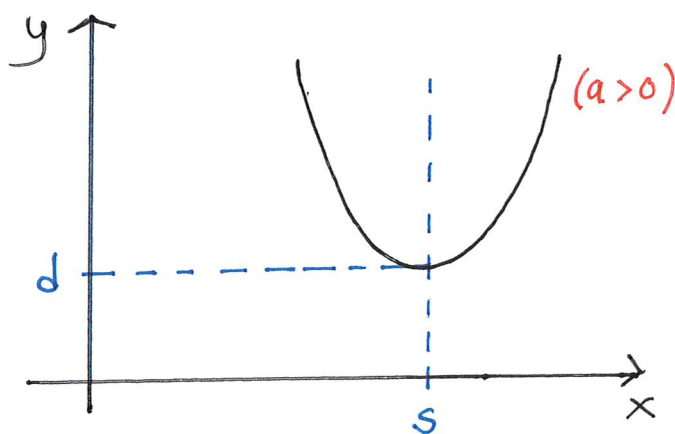
$$\text{so } \underline{\underline{y = 3x - 2}}$$

3. Quadratic functions

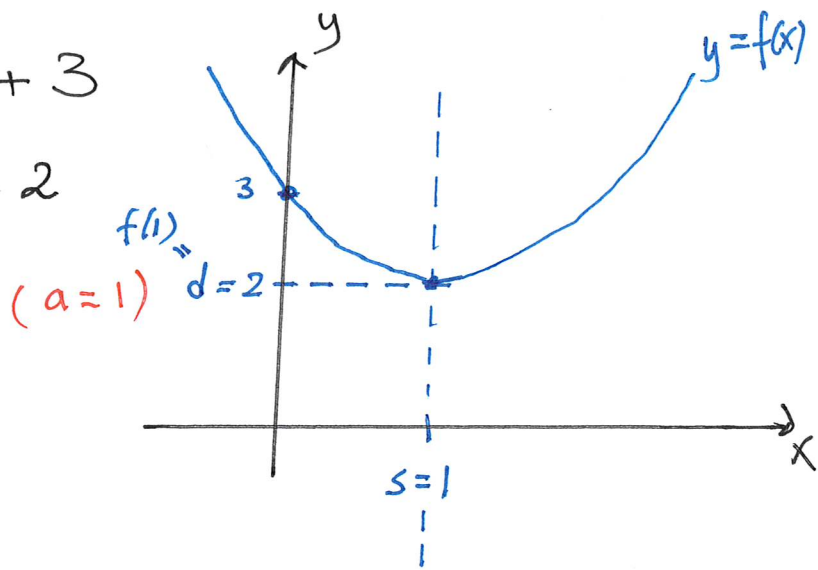
$$f(x) = ax^2 + bx + c$$

But if we want to draw/understand the graph, the following standard expression is better:

$$f(x) = a(x - s)^2 + d$$



Ex $f(x) = x^2 - 2x + 3$
 $= (x-1)^2 + 2$



Problem

The quadratic function $f(x)$ has minimum value $y = -1$ and symmetry line $x = 5$ and the graph passes through the point $(9, 3)$.

- a) Determine the expression $f(x) = a(x-s)^2 + d$
 b) Determine where the graph of $f(x)$ crosses the x -axis and the y -axis.

Solution

a) We have been given $s = 5$ and $d = -1$.
 so $f(x) = a(x-5)^2 - 1$

Then $f(9) = 3$ gives $a(9-5)^2 - 1 = 3$
 $a \cdot 16 = 4$

and $f(x) = 0.25(x-5)^2 - 1$ $a = \frac{4}{16} = 0.25$

b) Crosses x -axis: Solve $f(x) = 0$
 i.e. $0.25(x-5)^2 - 1 = 0$ — 1.4
 get $(x-5)^2 = 4$

so $x-5 = \pm 2$ so $x = 3$ or $x = 7$

Crosses the y-axis: $y = f(0) = 0.25 \cdot (0-5)^2 - 1$
 $= 0.25 \cdot 25 - 1 = 6.25 - 1 = \underline{5.25}$

or as point: (0, 5.25)

4. Revenue and cost functions

$$\text{Profit} = \text{Revenue} - \text{cost}$$

$$P(x) = R(x) - C(x)$$

x = number of units produced
= units sold

Ex $R(x) = 15x$, $C(x) = 0.05x^2 - 10x + 525$
Determine the number of units x
which maximizes profit. Calculate
maximal profit.

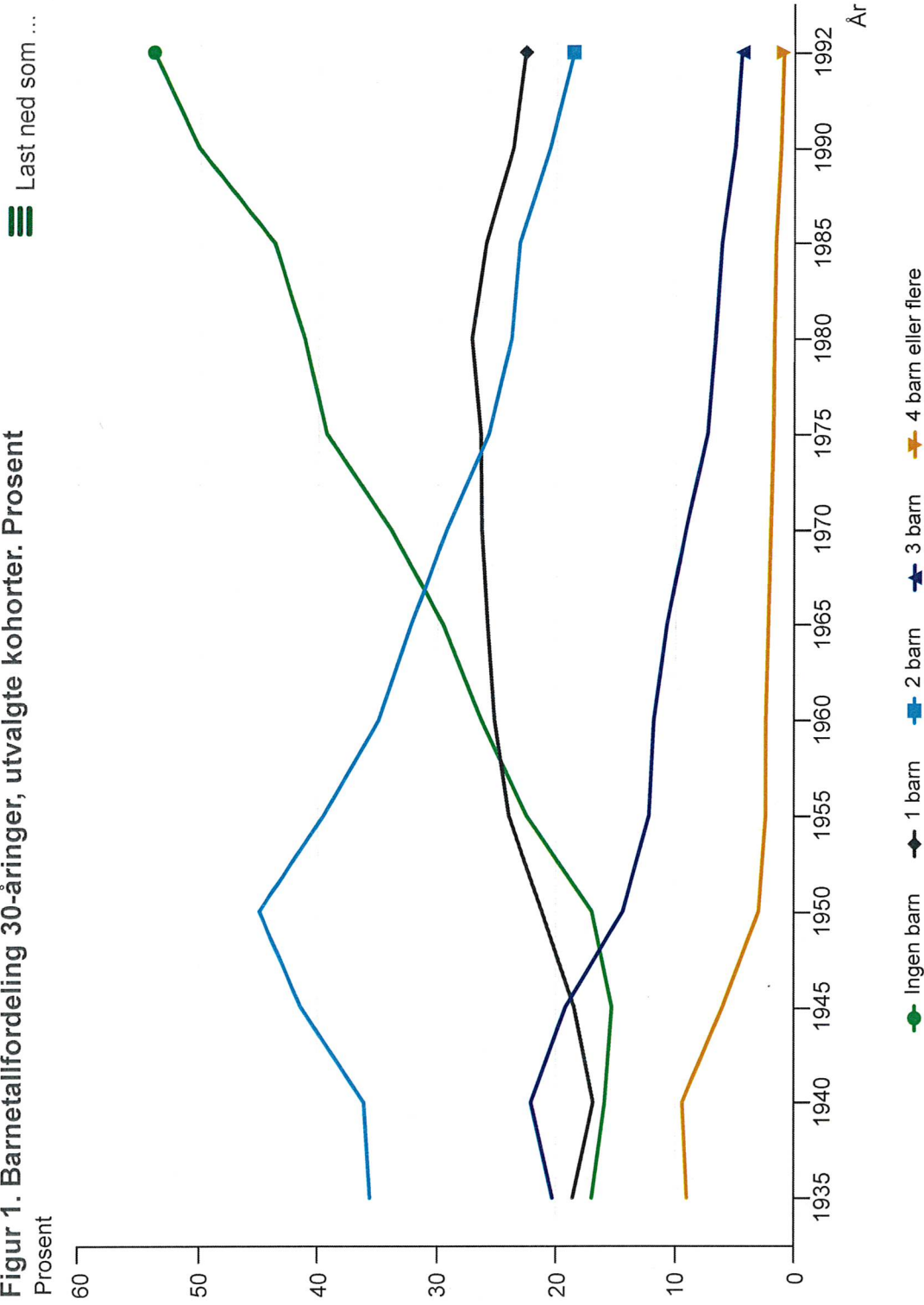
$$P(x) = 15x - (0.05x^2 - 10x + 525)$$

$$\stackrel{\text{complete the sq.}}{=} -0.05 \left[(x - 250)^2 - 52000 \right]$$

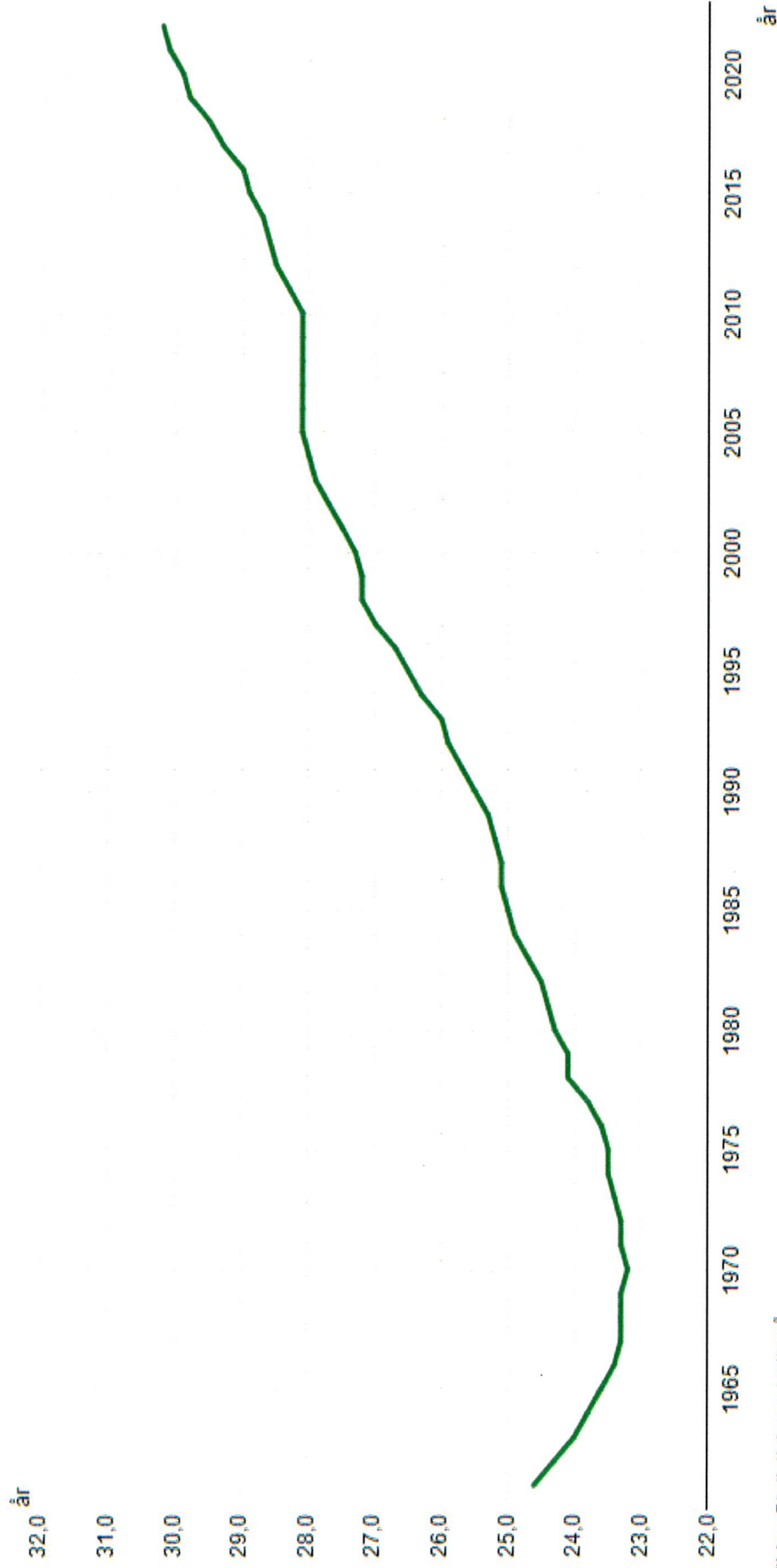
So max. profit if $x = 250$

$$\begin{aligned} \text{Max. profit} &= P(250) = -0.05 \cdot (-52000) \\ &= \underline{\underline{2600}} \end{aligned}$$

Figur 1. Barnetallfordeling 30-åring, utvalgte kohorter. Prosent



07872: Foreldrenes gjennomsnittlige fødealder ved første barns fødsel, etter år. Mors fødealder første barn.

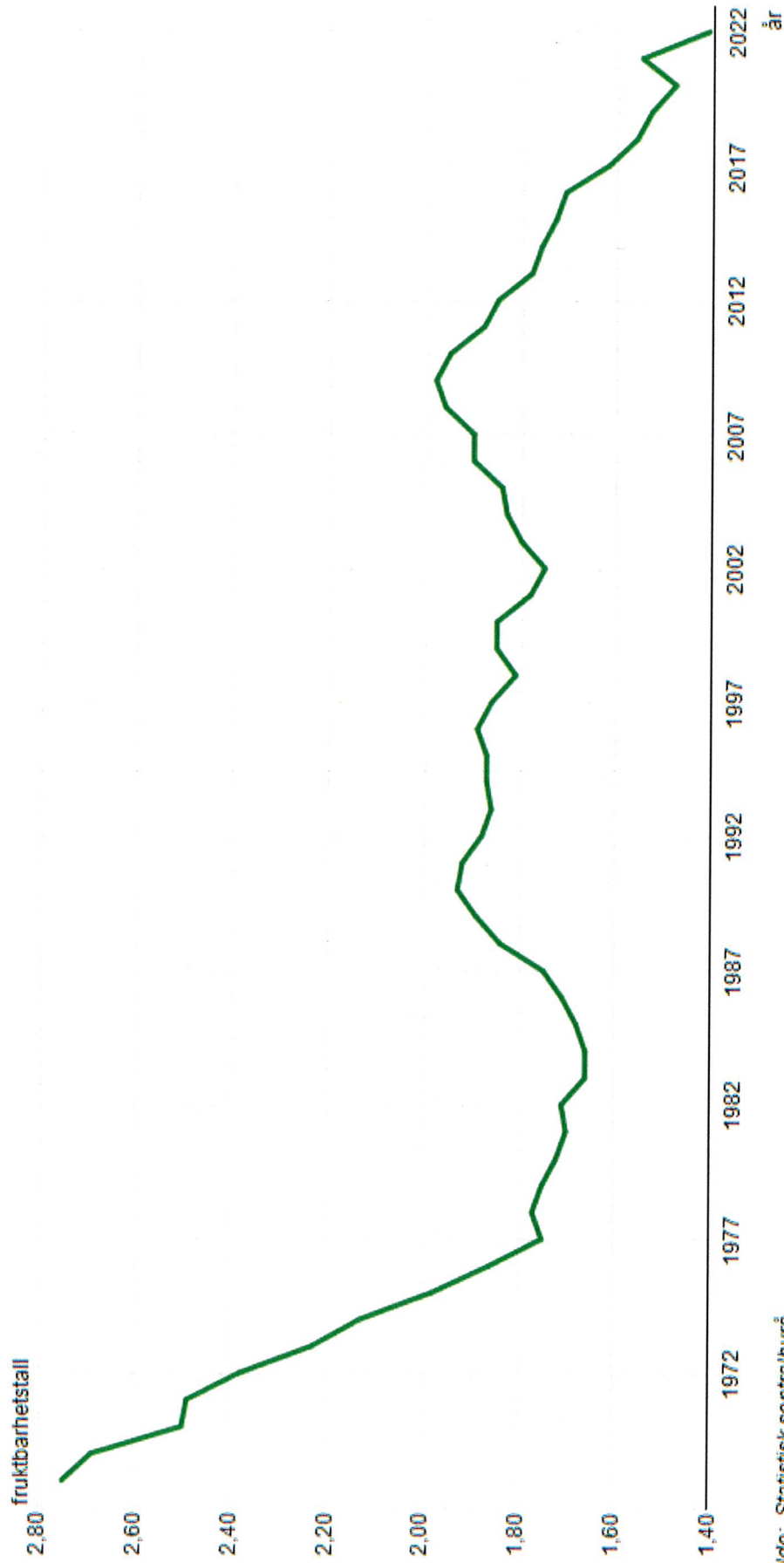


Kilde: Statistisk sentralbyrå

Fotnoter

Tall for 1961-1985 er beregnet ut fra nytt tilgjengelig datagrunnlag fra 2009. Tilsvarende datagrunnlag brukes for beregning av fars gjennomsnittsalder ved første barns fødsel.

04232: Samlet fruktbarhetstall, kvinner, etter år. Samlet fruktbarhetstall, kvinner.



Kilde: Statistisk sentralbyrå

Fotnoter

Samlet fruktbarhetstall er summen av 1-årige aldersavhengige fruktbarhetsrater 15-49 år. Antall barn hver kvinne kommer til å føde under forutsetning av at fruktbarhetsmønstret i perioden varer ved og at dødsfall ikke forekommer.